

Şekil Sayı Eşleştirme

→
= 2

×
= 1

⬠
= 4

△
= 0

▽
= 7

☆
= 5

⊕
= 9

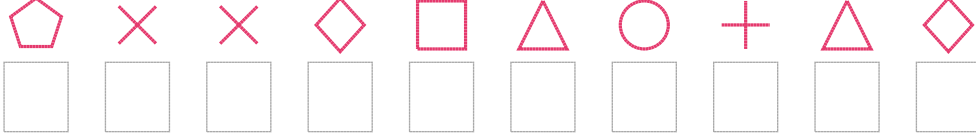
○
= 3

◇
= 6

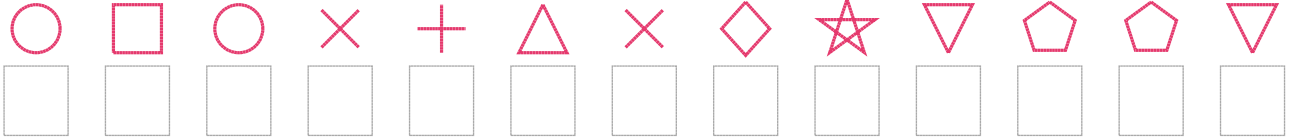
□
= 8

Aşağıdaki uzun şifreleri hatasız çözerek altlarına yazın:

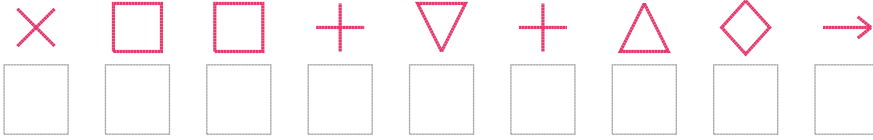
1. Şifre



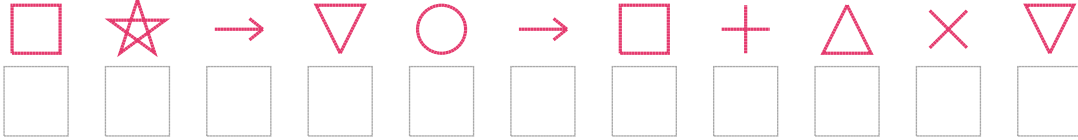
2. Şifre



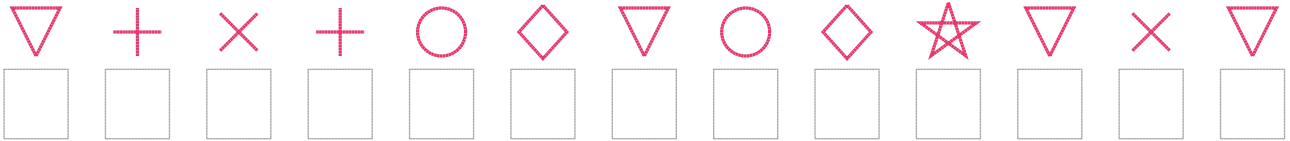
3. Şifre



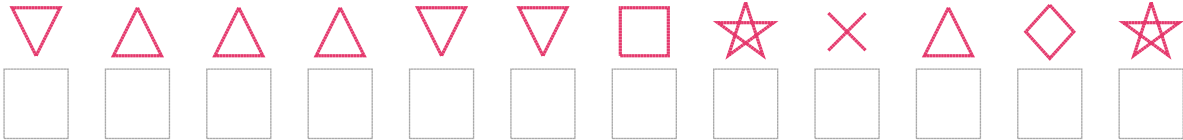
4. Şifre



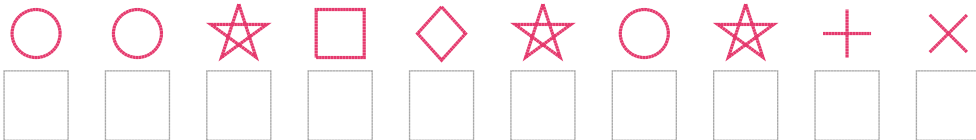
5. Şifre



6. Şifre



7. Şifre



□ BONUS: 3. ve 4. şifrenin üçüncü rakamının toplamı kaçtır?

Cevap Anahtarı

1. Şifre: 4116803906
2. Şifre: 3831901657447
3. Şifre: 188979062
4. Şifre: 85273289017
5. Şifre: 7919367365717
6. Şifre: 700077851065
7. Şifre: 3358653591

□ Bonus Soru Cevabı: 10